

Battle of Britain Bunker

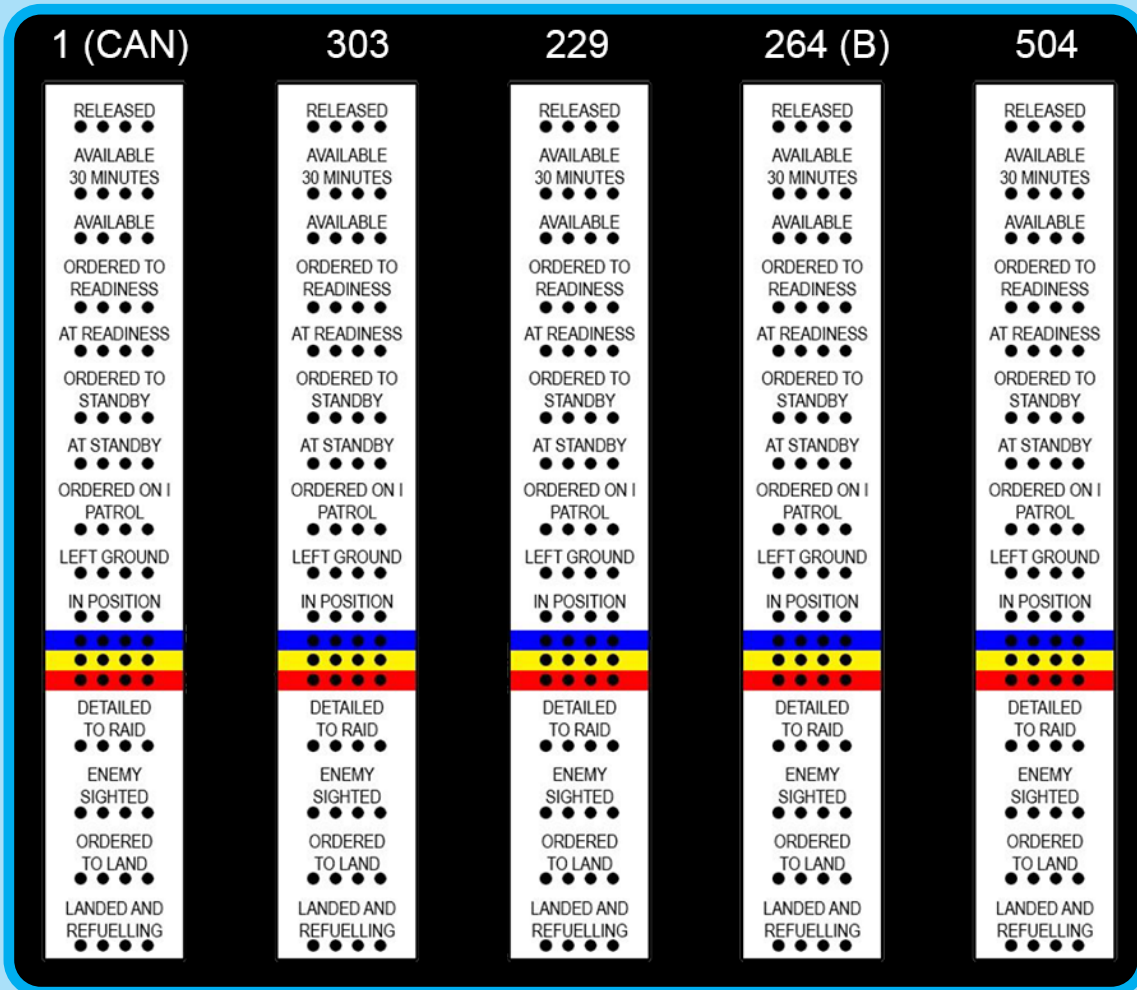


Welcome to the Battle of Britain Bunker!
This activity sheet will help you look for different parts of the Bunker and you will learn how some of the operations took place underground here during World War II.

Tote Board

Look: Can you see the Tote Board?

This helped everyone see what the different squadrons were doing.



Try filling in the missing letters using the Tote Board to help you.

- 1) AV ILA LE IN 30 MIN TES
- 2) ORDE ED T STAN BY
- 3) ETAI D TO RAI
- 4) E E Y SI H E
- 5) LAN ED AN R FUE I G

Clock

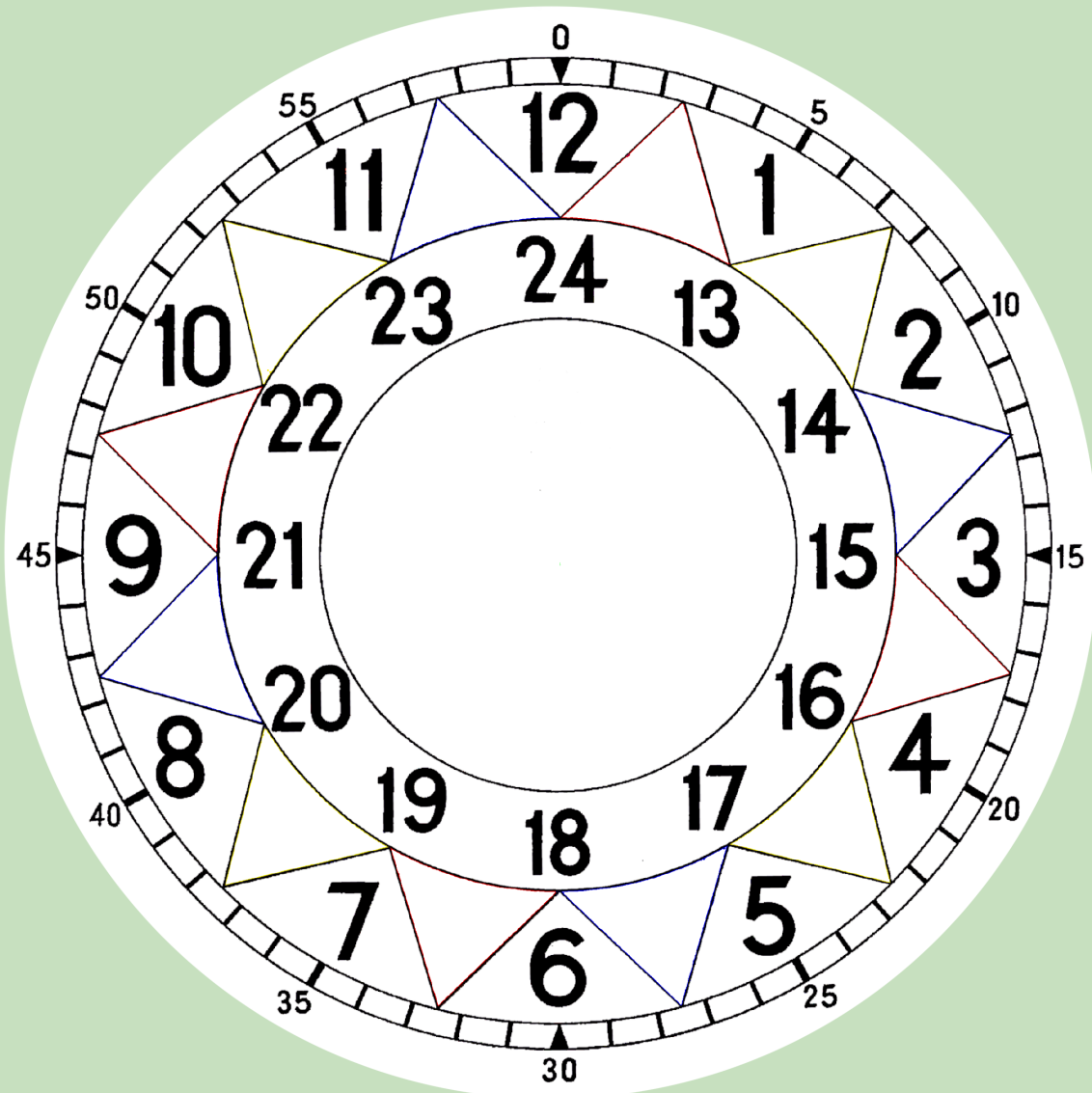

Look: Can you see the clock on the wall underneath the Tote Board?

The coloured triangles match the coloured arrows on the map. This was used to help everyone keep track of what was happening in real time. The arrows followed a colour sequence.

Using the picture of the clock, can you fill in all of the triangles using the correct colour?

Next, can you draw in a minute hand and an hour hand which shows 11:30?

Hint: have a look at the photo!



DID YOU KNOW?

Look up: See the royal box?

The King and Queen came to visit the Bunker and they had their own Royal Box to sit in and watch what was happening.



Can you draw the King and Queen watching from their Royal box?



Wordsearch time!

Can you find the hidden words in the Battle of Britain wordsearch?

- SPITFIRE
- MAP
- RADAR
- BUNKER
- BLITZ
- UXBRIDGE

Y	D	M	Q	E	Y	C	N	V	S
U	R	A	D	A	R	S	G	R	P
I	X	P	W	H	F	D	E	U	N
J	D	B	I	L	L	J	Y	D	C
L	A	K	R	O	P	S	F	Q	L
Q	Q	L	P	I	B	L	I	T	Z
D	W	S	M	A	D	N	B	X	W
I	A	G	C	W	K	G	P	O	L
F	J	L	B	U	N	K	E	R	J
S	P	I	T	F	I	R	E	W	Z

Plotting Blocks

Look: From your seat have a look at the map! Can you see the wooden plotting blocks on it?

There are two types. One block shows the enemy aircraft and the other block shows the friendly aircraft.

Have a look at one of our friendly plotting blocks below. The **yellow** flag tells you the squadron name. The **red** numbers represent how many aircraft are in the formation. The **blue** numbers describe the altitude (flying height) in thousands of feet.



Can you make a plotting block?

No. 303 Squadron is in the air, flying at 15,000 feet.

There are 11 of them in total.

Fill in the block here to show this information

